





1. Which of the following is the correct multiplication sentence for $4 + 4 + 4 + 4 + 4 + 4$?

- A $4 \times 4 = 16$
- B $2 \times 12 = 24$
- C $6 \times 4 = 24$
- D $8 \times 3 = 24$

2. Which of the following shows the correct array for a multiplication sentence for $3 + 3 + 3 + 3$.

- A 
- B 
- C 
- D 

3. **Writing to Explain** Draw an array using Xs and write a multiplication and an addition sentence you could use to show how 12 juice boxes could be arranged to form an array. Explain why they are both correct.
