
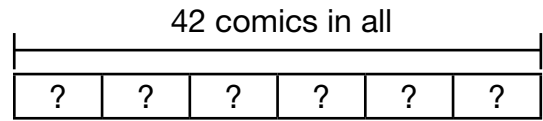


1. Yvette has 24 comics. She gives 6 comics to each of her friends. If she gives them all away, how many friends did she give comics to? Use the drawing to help you solve the problem.



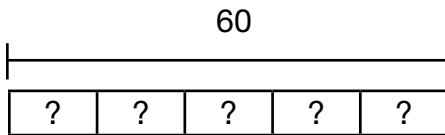
- A 4
- B 5
- C 6
- D 7

2. Jackson gives away all 42 of his comics to 6 friends. If each friend receives the same number, how many comics does each friend receive? Use the drawing to help you solve the problem.



- A 4
- B 6
- C 7
- D 8

3. **Writing to Explain** Write a division problem that matches the drawing below. Explain your thinking.




---



---



---